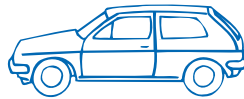



Properties of Solids

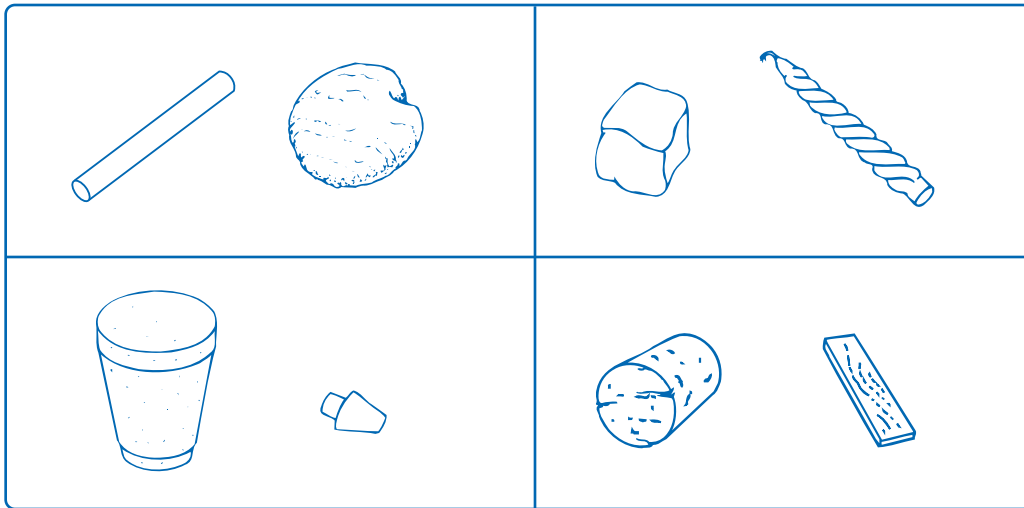
Session I—Activity 6

1. Circle the objects below that are solids.



Session II—Activity 7

2. Test each pair of objects. Then circle the harder object in each pair.



3. Draw a picture on the line below of each of your 8 objects. Draw them in order from softest to hardest.

Softest

Hardest