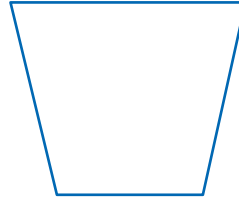

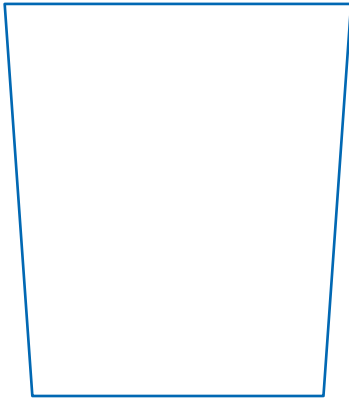


Properties of Liquids

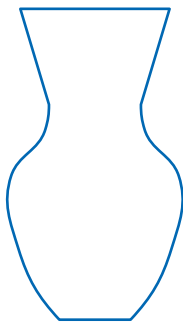
1. Use your red crayon. Color in the level and shape of the water in your small plastic cup.



2. Pour the water into each container. As you do, color in the level and shape of the water.



3. Suppose you fill Container A with water. What do you think the shape of the water will look like? Circle the correct shape.



Container A

