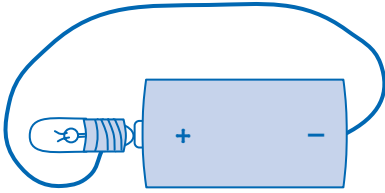


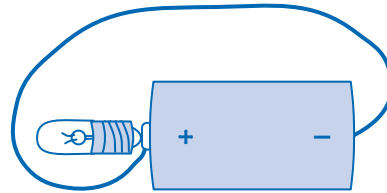
Simple Circuits

1. Will the bulb light? Write *yes* or *no* on the line.



Circuit A

Predict _____



Circuit B


Predict _____

Did the bulb light? Write *yes* or *no* on the line.

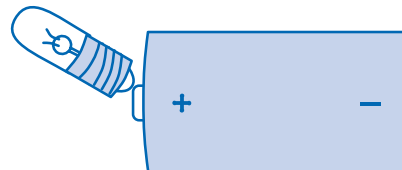
Observe _____

Observe _____

2. Draw the missing wires.



Circuit C



Circuit D