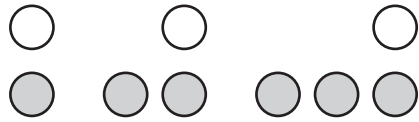
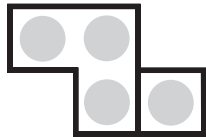


1. Draw what comes next in the pattern.



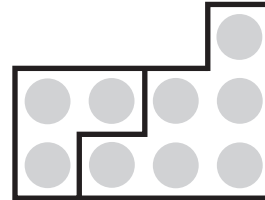
Write a number sentence to go with each figure.

2.



\_\_\_\_\_

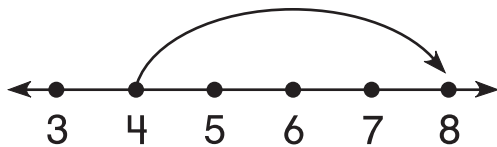
3.



\_\_\_\_\_

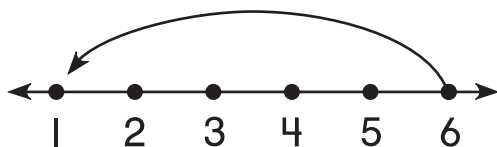
Write the missing number.

4.



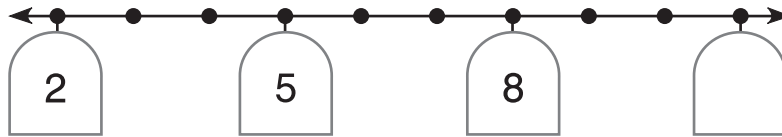
$$\boxed{4} + \boxed{\phantom{00}} = \boxed{8}$$

5.

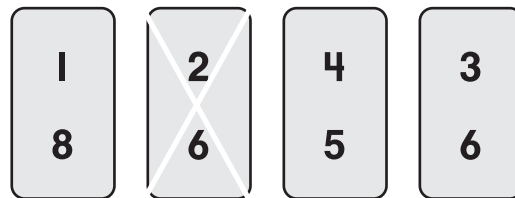


$$\boxed{6} - \boxed{5} = \boxed{\phantom{00}}$$

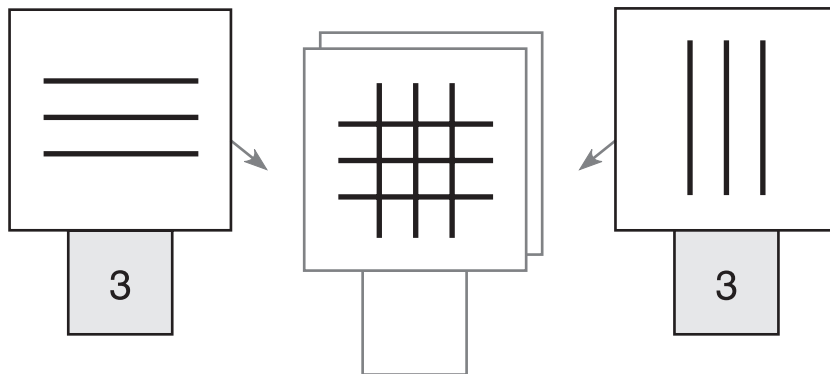
6. Skip-count. Fill in the missing number.



7. Cross out the number pair that does NOT have a sum of 9.



8. How many intersections are there?



9. Ashley ties 2 knots on a rope.  
 She ties 5 knots on the next rope.  
 Then she ties 8 knots.  
 How many knots will be on her next rope if she continues in this way?

\_\_\_\_\_ knots