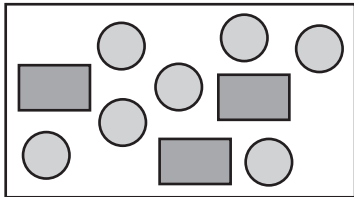














1. Complete the sentence. Write *more*, *less*, or *equally*.

Jimmy is _____ likely to pull out a circle than a rectangle.




2. How many more children have brown hair than have red hair?

_____ children

Hair Color of Students in Mrs. Ludwig's Class						
blonde	 Julie	 Ashley	 Bill	 Lola		
brown	 Evan	 Lauren	 Todd	 Wei	 Karen	 Gabby
red	 Patrick	 Molly				

3. How many children are doing show and tell on Tuesday?

_____ children



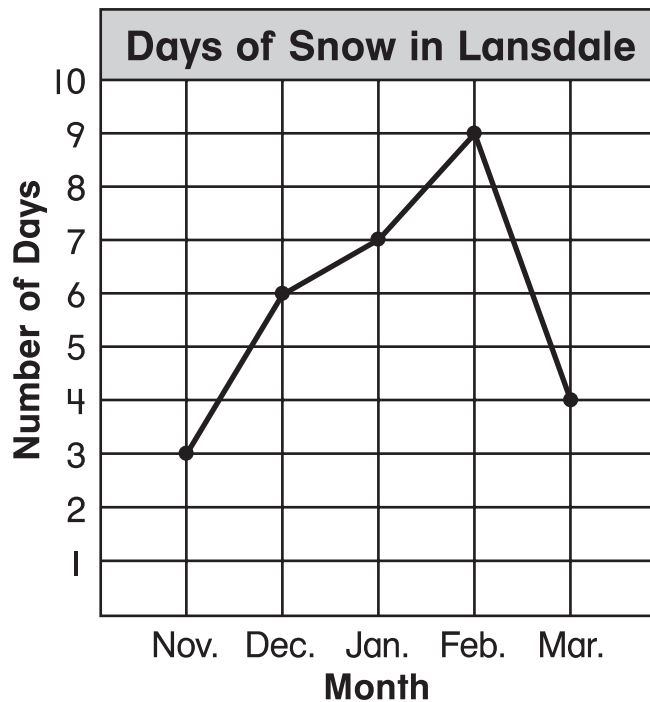
4. Jake has 8 friends who like bananas. How many ☺ should be in the row for bananas? Draw them.

Favorite Fruits of Jake's Friends						
apples	☺	☺	☺	☺	☺	
bananas						
oranges	☺	☺	☺			

Key: Each ☺ stands for 2 children.

5. How many months had more days of snow than December?

_____ months



6. Marcie buys stickers for 7¢ each. She paid 42¢ for her stickers. How many stickers did she buy? Fill in the table to solve.

Number of Stickers	1	2	3	4	5	6
Total Amount	7¢	14¢				

_____ stickers