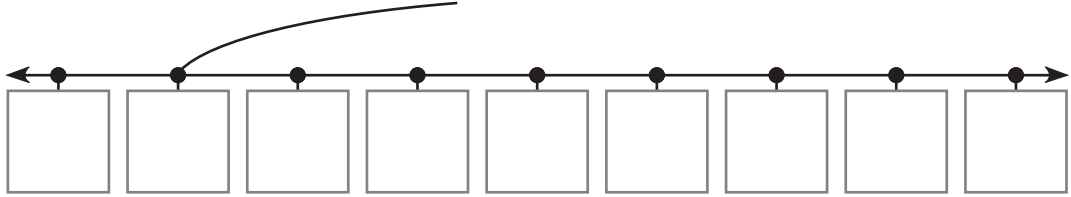


Completing Number Sentences

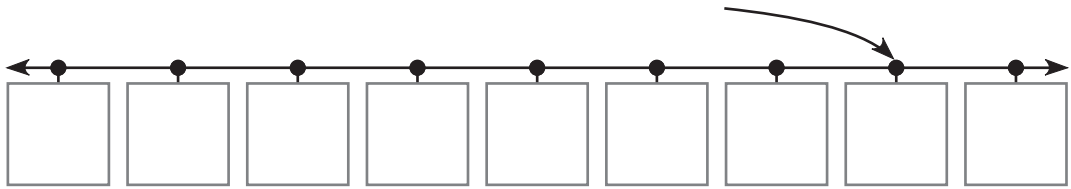
Label each number line. Complete the addition sentence.

1.



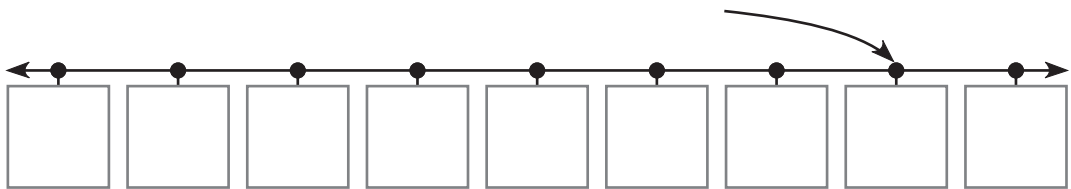
$$\boxed{7} + \boxed{} = \boxed{13}$$

2.



$$\boxed{} + \boxed{6} = \boxed{23}$$

3.



$$\boxed{} + \boxed{6} = \boxed{53}$$