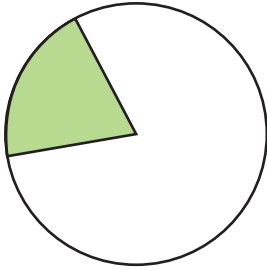


Exploring One Half

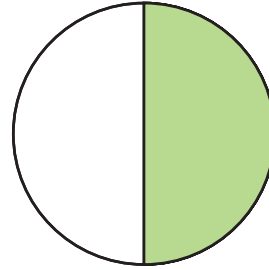
NCTM Standards 1, 6, 8, 9, 10

Circle the pictures that show one half.

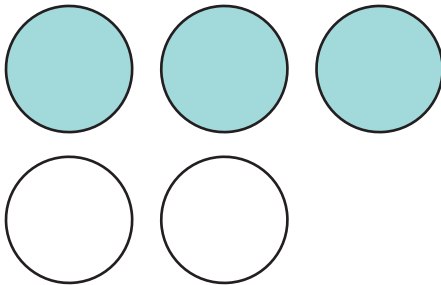
1.



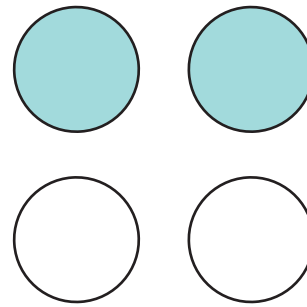
2.



3.




4.



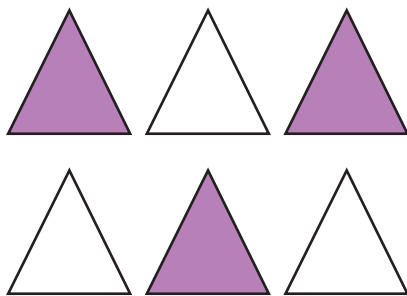
5.



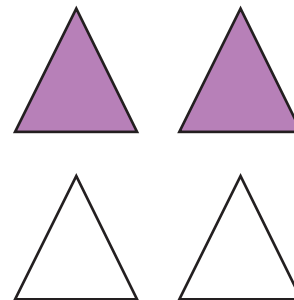
6.



7.



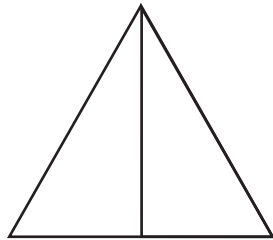
8.



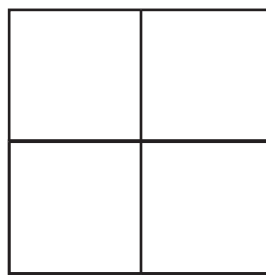
NOTE: Your child is learning to find one half of an object or set of objects.

Color $\frac{1}{2}$ of each picture.


9.



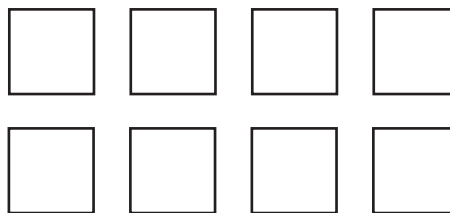
10.




11.



12.



13. Color $\frac{1}{2}$ of the set of circles.
Tell how you know it is $\frac{1}{2}$.



Challenge

14. Dwayne plays video games for half an hour.
How many minutes is that? Explain.

_____ minutes

