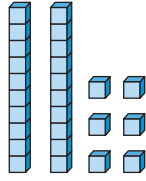


Finding Half: Even or Odd

NCTM Standards 1, 2, 6, 7, 8, 9, 10

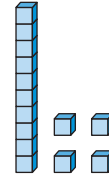
How much is half?

1.



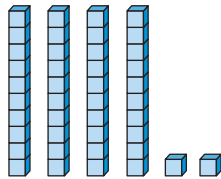
Half of 26 is 13.

2.



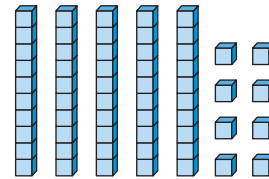
Half of 14 is _____.

3.



Half of 42 is _____.

4.



Half of 58 is _____.

	Whole	Half
5.	6	3
6.	8	
7.	10	
8.	18	
9.	24	
10.	36	
11.	70	



NOTE: Your child is learning to find half of even and odd numbers. Together, find half of 20.

What number will solve each riddle?

12. I am an even number. I am half of 44. What number am I?

22

13. I am an even number. Half of me is 14. What number am I?

14. I am an even number. Half of me is 36. What number am I?

15. I am an odd number. I am half of 50. What number am I?

16. I am an odd number. Half of me is $11\frac{1}{2}$. What number am I?



17. I am an odd number. Half of me is $9\frac{1}{2}$. What number am I?





18. Make up your own riddle. Ask a classmate to solve it.



Challenge

Write the same number in frames that are the same.

19.  +  = 86

20.  +  = 56

21.  +  = 9

22.  +  = 25