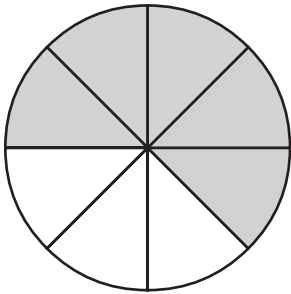


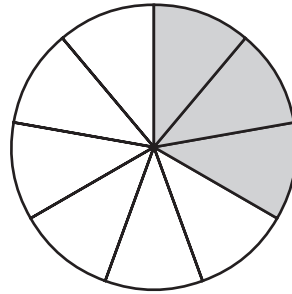
More Fractions

What part is colored? Write the fraction.


1.



2.



3.



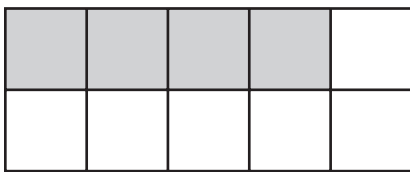
4.

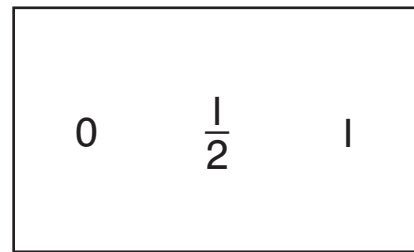


Write the fraction for the colored part.

Circle if it is closer to 0, $\frac{1}{2}$, or 1.

5.





6.

