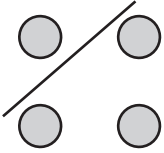
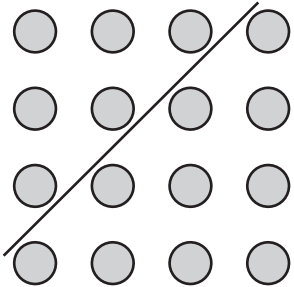



Connecting Addition and Subtraction

Picture	Complete each sentence. Circle the sentence that matches the picture.	Write the fact family for the picture.
<p>1.</p> 	<p> $4 + 1 = \underline{\quad}$ $9 - \underline{\quad} = 5$ $4 = \underline{\quad} + 1$ $\underline{\quad} = 3 - 1$ </p>	<p> $\underline{\quad} + \underline{\quad} = \underline{\quad}$ $\underline{\quad} + \underline{\quad} = \underline{\quad}$ $\underline{\quad} - \underline{\quad} = \underline{\quad}$ $\underline{\quad} - \underline{\quad} = \underline{\quad}$ </p>
<p>2.</p> 	<p> $\underline{\quad} - 10 = 6$ $8 + 8 = \underline{\quad}$ $10 - 6 = \underline{\quad}$ $\underline{\quad} = 9 + 5$ </p>	<p> $\underline{\quad} + \underline{\quad} = \underline{\quad}$ $\underline{\quad} + \underline{\quad} = \underline{\quad}$ $\underline{\quad} - \underline{\quad} = \underline{\quad}$ $\underline{\quad} - \underline{\quad} = \underline{\quad}$ </p>
<p>3.</p> 	<p> $9 - 3 = \underline{\quad}$ $\underline{\quad} - 9 = 3$ $9 + 9 = \underline{\quad}$ $\underline{\quad} = 10 + 8$ </p>	<p> $\underline{\quad} + \underline{\quad} = \underline{\quad}$ $\underline{\quad} + \underline{\quad} = \underline{\quad}$ $\underline{\quad} - \underline{\quad} = \underline{\quad}$ $\underline{\quad} - \underline{\quad} = \underline{\quad}$ </p>