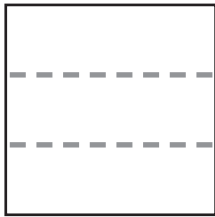


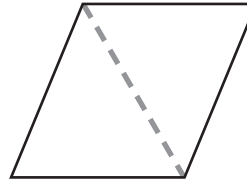
Cutting Polygons Apart

What new figures do you get if you cut along the lines?

1.

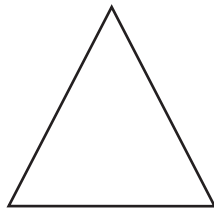


2.

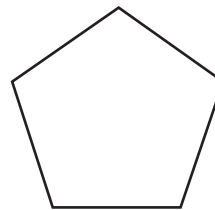


Draw one or two lines to make the new figures.

3. Make 2 triangles.



4. Make 3 triangles.



5. Cindy cut this pentagon in half to make two congruent pieces. Could the pieces be triangles? Use words and the picture to explain.

