

Algebra

What numbers are missing?

1. 1, 4, 7, _____, 13

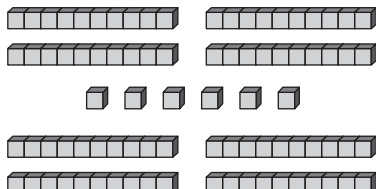
2. 1, 3, 6, _____, 15, 21

3. _____, 10, _____, 20, 25, 30

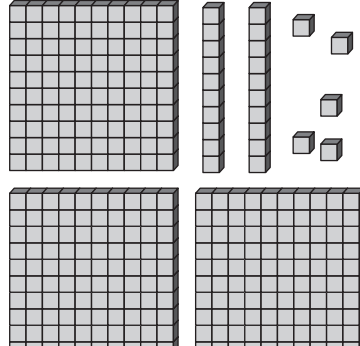
4. _____, 3, _____, 9, 12, 15

Number and Operations

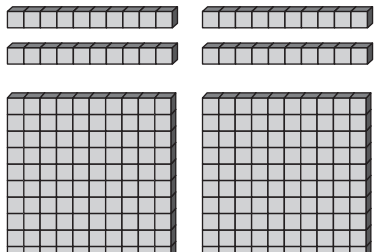
What is missing?

5.  _____ hundreds _____ tens _____ ones

_____ + _____ + _____ = _____

6.  _____ hundreds _____ tens _____ ones

_____ + _____ + _____ = _____

7.  _____ hundreds _____ tens _____ ones

_____ + _____ + _____ = _____