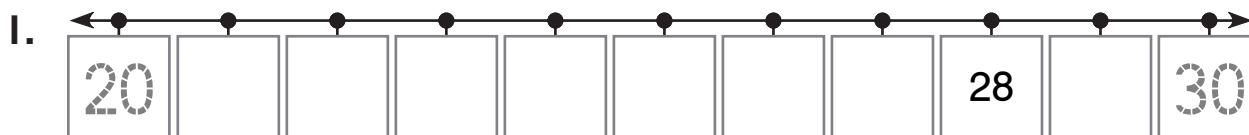


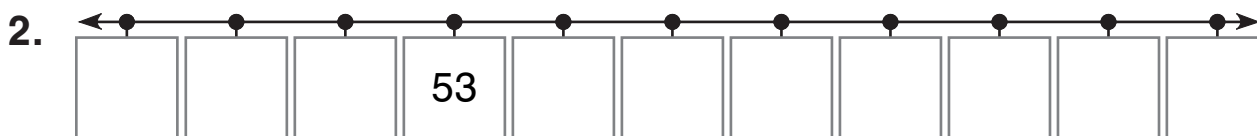
## Algebra

Look at the number on each line. Write the tens that sandwich the number. Which ten is closer?



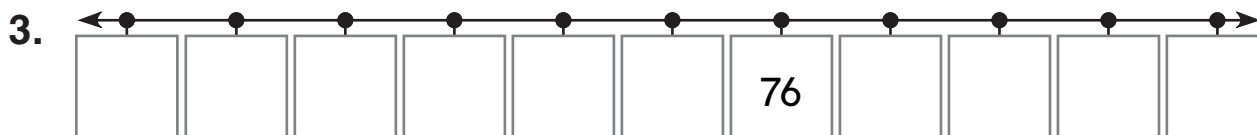
The nearest ten to 28 is 30.

---



The nearest ten to 53 is \_\_\_\_\_.

---



The nearest ten to 76 is \_\_\_\_\_.

---

## Geometry

What figure is it? Match each word to a figure.

4. circle



5. triangle



6. square

