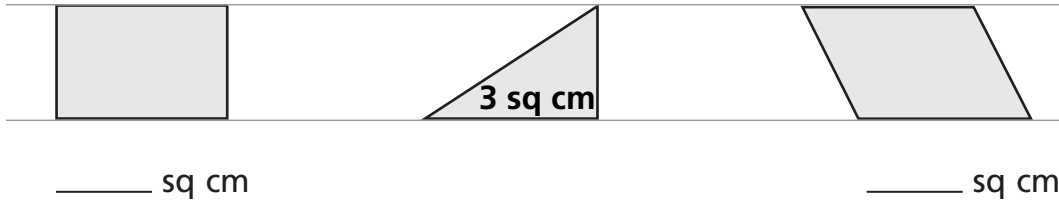
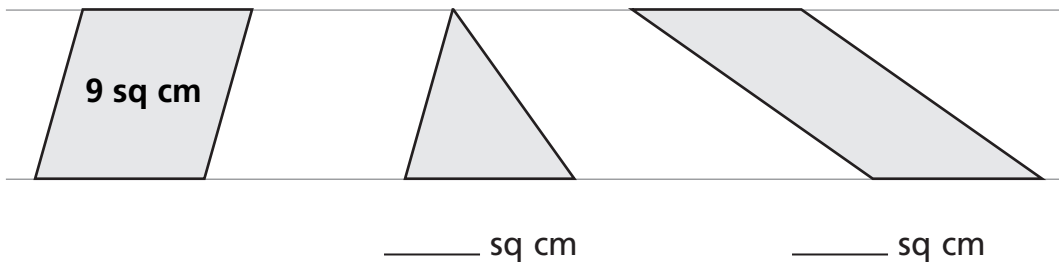


Area of Nets

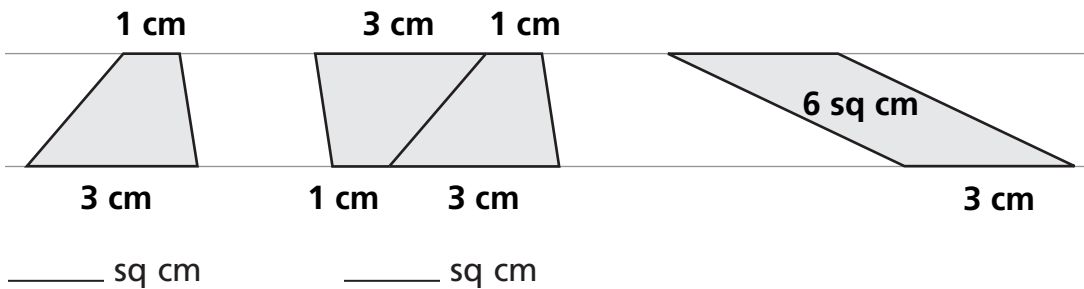
1 These three figures all have the same height and the same base length. The area of one of them is shown. Write the areas of the other two.



2 Again, all three figures have the same height and base length. The area of one is shown. Write the areas of the other two.



3 All three figures have the same height. The area of one is shown. Write the areas of the other two.



4 What is the total area of all the faces shown on this net of a rectangular prism?

_____ sq cm

