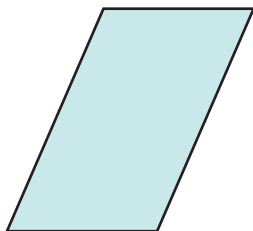


# Perimeter Formulas

NCTM Standards 1, 3, 4, 7, 8

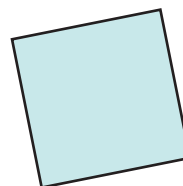
Measure to the nearest centimeter to find the perimeter of each parallelogram.

1



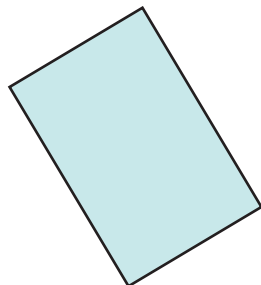
Perimeter: \_\_\_\_\_ cm

2




Perimeter: \_\_\_\_\_ cm

3



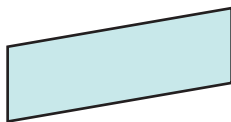
Perimeter: \_\_\_\_\_ cm

4



Perimeter: \_\_\_\_\_ cm

5



Perimeter: \_\_\_\_\_ cm

6



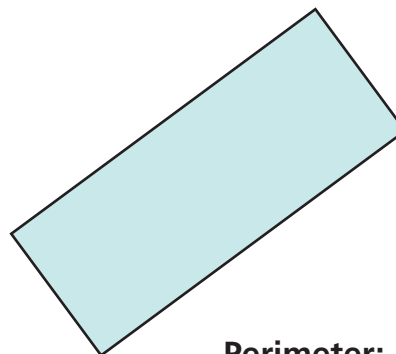
Perimeter: \_\_\_\_\_ cm

7



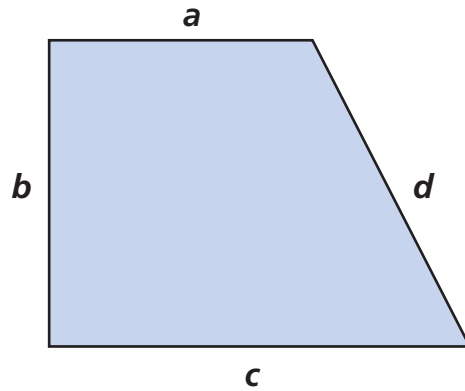
Perimeter: \_\_\_\_\_ cm

8



Perimeter: \_\_\_\_\_ cm

Solve the problems.



9 Why can't you use a formula for finding the perimeter of a parallelogram to find the perimeter of the figure above?

---

---

---

---



10 How can you find the perimeter?

---

---

---

---



11 **Challenge** Does the formula for finding the perimeter of a rectangle work for finding the perimeter of a square? Tell how you know. \_\_\_\_\_

---

---