




# Introducing This Year's Mathematics

- 1 Use the table to make an organized list of all possible combinations of dimes, nickels, and pennies that make **28¢**.

DIMES 	NICKELS 	PENNIES 



## Test Prep

- 2 Which combination of coins is NOT worth 49¢?
- A. 4 dimes, 1 nickel, 4 pennies
  - B. 3 dimes, 3 nickels, 4 pennies
  - C. 2 dimes, 5 nickels, 4 pennies
  - D. 1 dime, 4 nickels, 4 pennies
- 3 Sandy has 2 quarters, 1 dime, and 4 pennies. How much money does she have?
- A. 39¢
  - B. 59¢
  - C. 60¢
  - D. 64¢