

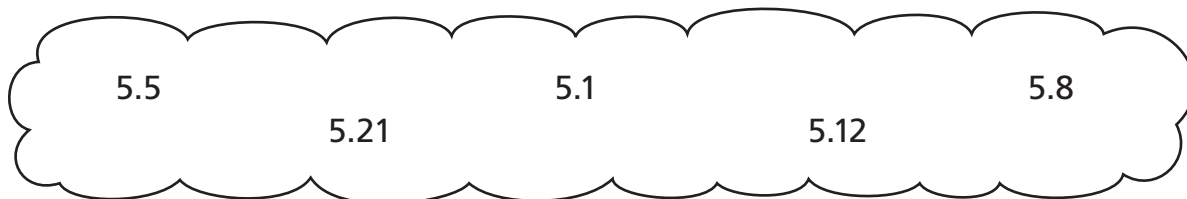
Large and Small Numbers

Write the numbers in order from greatest to least.


1



2

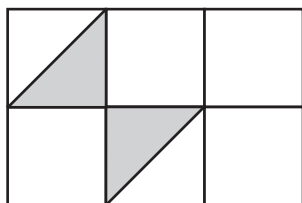


3



Test Prep

- 4 Which fraction matches the shaded part of the sketch?



- A. $\frac{2}{12}$ C. $\frac{2}{8}$
B. $\frac{2}{10}$ D. $\frac{2}{6}$

- 5 A room has 31 rows of 31 chairs. One row is added, and one chair is removed from each row. Which is the only expression that does **not** show how many chairs there will be?

- A. $(31 + 1) \times (31 - 1)$
B. $31 \times 31 - 1$
C. $(31 - 1) \times 31$
D. 32×30