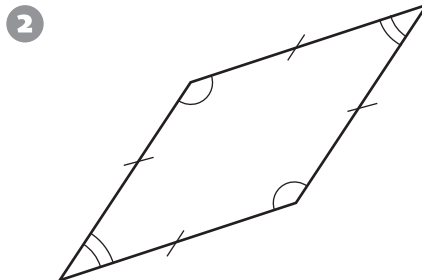


# Comparing and Classifying Quadrilaterals

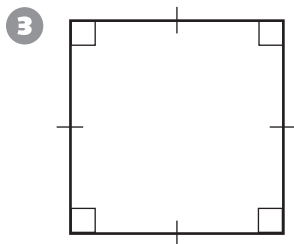
**Congruent sides and angles have the same markings.**  
**Circle ALL the names that match each quadrilateral.**



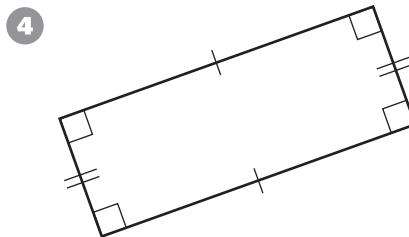
rectangle                  parallelogram  
trapezoid                  rhombus



square                          rhombus  
rectangle                      parallelogram



rhombus                      rectangle  
square                          parallelogram



parallelogram              rhombus  
rectangle                      square



## Test Prep

5 In  $\triangle RST$ , the measure of  $\angle S$  is  $40^\circ$  and the measure of  $\angle T$  is  $50^\circ$ . What is the measure of  $\angle R$ ? Explain how you know.

\_\_\_\_\_

\_\_\_\_\_

\_\_\_\_\_