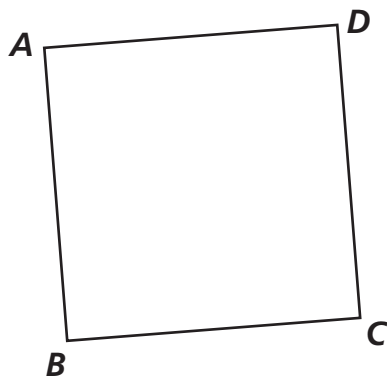


Length and Perimeter

Measure the sides of each figure to the nearest centimeter. Record the perimeter in cm.



1

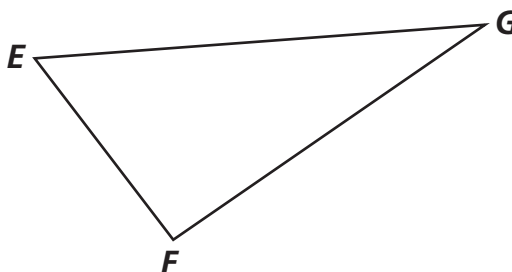


\overline{AB} _____ \overline{BC} _____

\overline{CD} _____ \overline{DA} _____

Perimeter _____

2

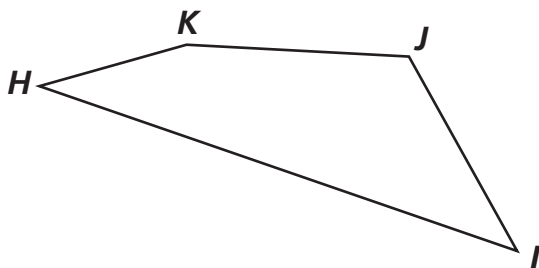


\overline{EF} _____ \overline{FG} _____

\overline{GE} _____

Perimeter _____

3

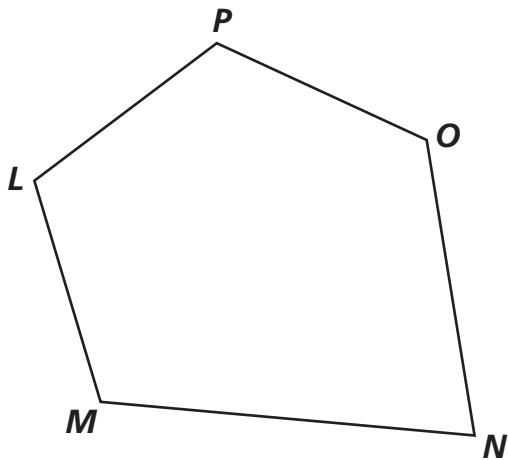


\overline{HI} _____ \overline{IJ} _____

\overline{JK} _____ \overline{KH} _____

Perimeter _____

4



\overline{LM} _____ \overline{MN} _____

\overline{NO} _____ \overline{OP} _____

\overline{PL} _____ Perimeter _____