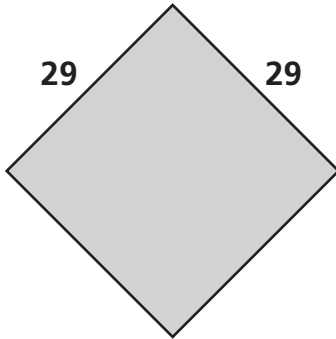


Perimeter Formulas

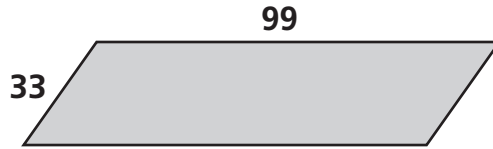
Find the perimeter of each parallelogram.

1



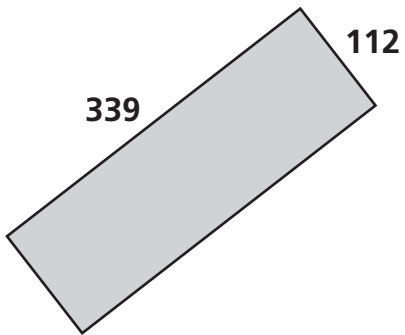
Perimeter _____ units

2



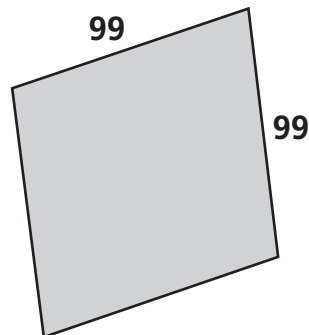
Perimeter _____ units

3



Perimeter _____ units

4



Perimeter _____ units



Test Prep

- 5 Taylor used 64 feet of fencing to enclose a square pen for his dog. How long is each side of the pen? Explain how you know.
