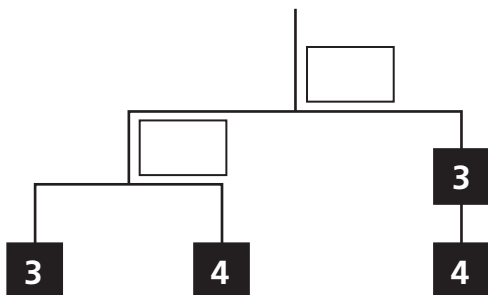


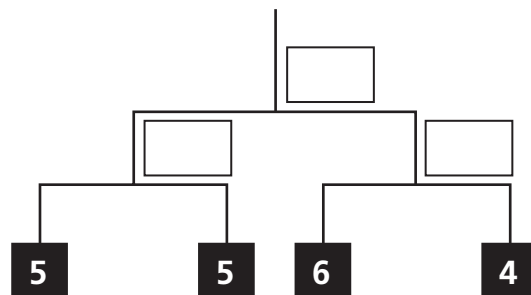
Introducing Mobiles

Write *yes* or *no* at each arm of the mobile to show if it is balanced. Write the total weights.

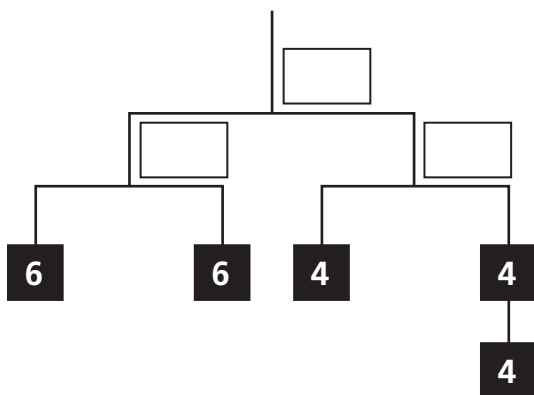
1 Total Weight: _____



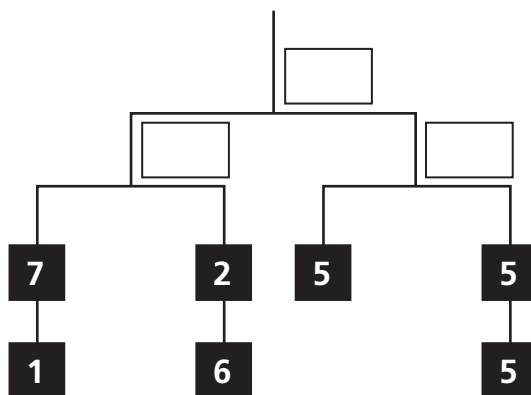
2 Total Weight: _____



3 Total Weight: _____



4 Total Weight: _____



© Education Development Center, Inc.



Test Prep

5 Which group shows equivalent numbers?

A. $\frac{5}{2}$, $2\frac{5}{10}$, $2\frac{1}{2}$, 2.05

C. $1\frac{2}{3}$, $1\frac{6}{9}$, 1.23, $\frac{15}{9}$

B. $3\frac{1}{5}$, $3\frac{5}{25}$, 3.2, $\frac{16}{5}$

D. 4.025, $4\frac{25}{100}$, $\frac{17}{4}$, $4\frac{1}{4}$