

## Number and Operations

Complete each puzzle.

1

9	6	
2		9
	13	24

45		75
10		45
55	65	

2

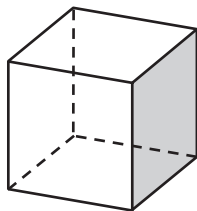
	9	
6	8	
13		30

	36	64
24		
52		

## Geometry

Write *prism* or *pyramid* to describe the figure. For each prism or pyramid, name the shape of the base. If the figure is neither a prism nor pyramid, write *neither*.

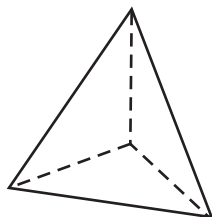
1



\_\_\_\_\_

\_\_\_\_\_

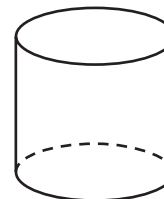
2



\_\_\_\_\_

\_\_\_\_\_

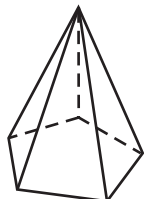
3



\_\_\_\_\_

\_\_\_\_\_

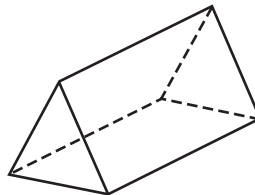
4



\_\_\_\_\_

\_\_\_\_\_

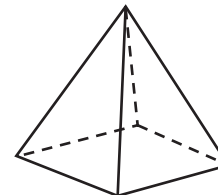
5



\_\_\_\_\_

\_\_\_\_\_

6



\_\_\_\_\_

\_\_\_\_\_