





Measurement


Measure each line segment to the nearest inch.

- 1  _____ in.

- 2  _____ in.

- 3  _____ in.

- 4  _____ in.

- 5  _____ in.

Algebra

Complete the input-output table.

	6	7	8	9	10	11
INPUT	15	22	18	36	20	28
Subtract 3.						
Multiply by 2.						
Add 7.						
OUTPUT						

Problem Solving

Complete each table.

12

x	8x
5	
9	
14	

13

x	6x
8	
5	
13	

14

x	11x
10	
4	
14	